

For AQA

Name

General Certificate of Secondary Education

MATHEMATICS

Higher Tier

Paper 1A Non-Calculator

H

For this paper you must have:

- mathematical instruments.

You must **not** use a calculator.



Time allowed: 2 hours

Instructions and Information

- Write your name in the box at the top of the page.
- Answer **all** questions in the spaces provided.
- The maximum mark for this paper is 100.
- The marks for questions are shown in brackets.

Advice

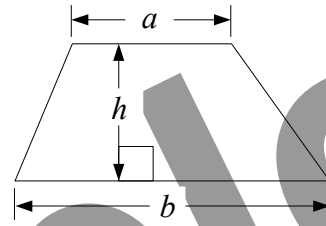
- In all calculations, show clearly how you work out your answer.

Written by Shaun Armstrong

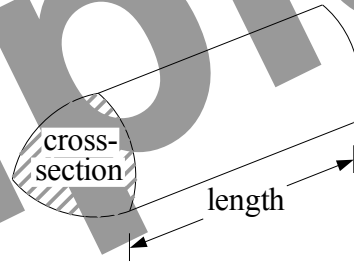
Only to be copied for use in the purchaser's school or college

Formulae Sheet: Higher Tier

$$\text{Area of trapezium} = \frac{1}{2}(a + b)h$$

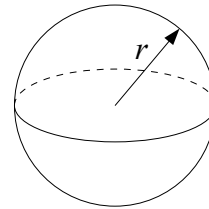


$$\text{Volume of a prism} = \text{area of cross-section} \times \text{length}$$



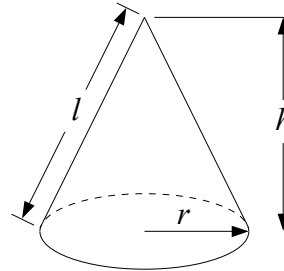
$$\text{Volume of sphere} = \frac{4}{3}\pi r^3$$

$$\text{Surface area of sphere} = 4\pi r^2$$



$$\text{Volume of cone} = \frac{1}{3}\pi r^2 h$$

$$\text{Curved surface area of cone} = \pi r l$$

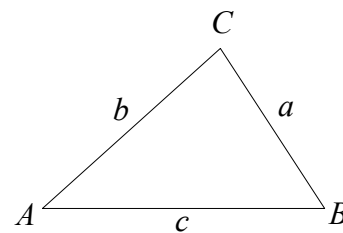


In any triangle ABC

$$\text{Area of triangle} = \frac{1}{2} ab \sin C$$

$$\text{Sine Rule} \quad \frac{a}{\sin A} = \frac{b}{\sin B} = \frac{c}{\sin C}$$

$$\text{Cosine Rule} \quad a^2 = b^2 + c^2 - 2bc \cos A$$



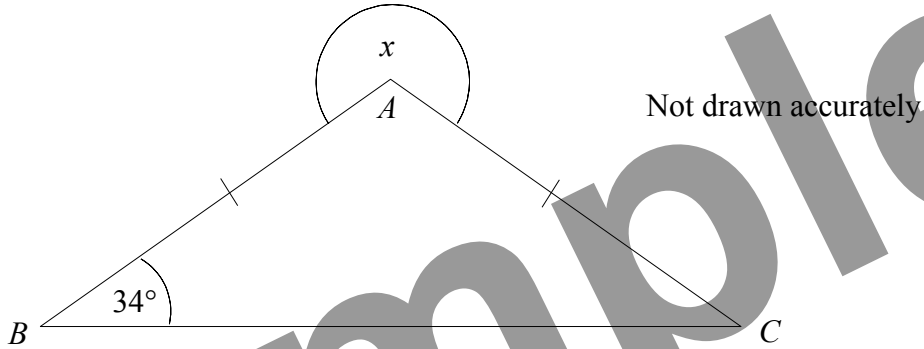
The Quadratic Equation

The solutions of $ax^2 + bx + c = 0$, where $a \neq 0$, are given by

$$x = \frac{-b \pm \sqrt{(b^2 - 4ac)}}{2a}$$

Answer **all** questions in the spaces provided.

1



In the diagram, $AB = AC$ and angle $ABC = 34^\circ$.

Find the size of the angle marked x .

.....
.....
.....

Answer $x =$ degrees (3 marks)

2 (a) Express 56 as the product of its prime factors.

.....
.....
.....

Answer (2 marks)

2 (b) Find the Highest Common Factor (HCF) of 56 and 84.

.....
.....
.....
.....

Answer (2 marks)

3 Solve $5p + 9 = p - 3$

.....

.....

.....


.....

Answer $p =$ (3 marks)

4 The table gives information about the number of bedrooms in 720 houses.


Number of Bedrooms	Frequency
1	100
2	320
3	240
4	60

Draw an accurate pie chart to show this information.



(4 marks)

5 (a) On the grid, draw the graph of $y = 2x - 3$



(3 marks)

5 (b) Use your graph to solve the equation $2x - 3 = 1.4$

Answer $x = \dots\dots\dots$ (1 mark)

6 Tariq's bicycle has three gears.

The numbers of teeth on the gears are in the ratio $5 : 6 : 7$

In total there are 36 teeth on the gears.

6 (a) Work out how many teeth are on the middle gear.

.....
.....
.....

Answer (3 marks)

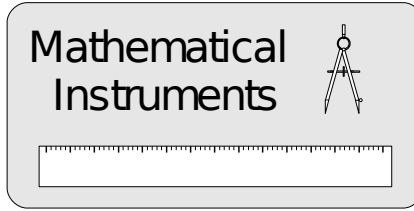
Tariq cycles 5 kilometres in 20 minutes.

6 (b) Work out his average speed in kilometres per hour.

.....
.....
.....

Answer km/h (2 marks)

7



Instrument Set
£2.80 + VAT

A set of mathematical instruments costs £2.80 plus $17\frac{1}{2}\%$ VAT.

- 7 (a) Calculate the total cost of the set of instruments.

.....
.....
.....
.....
.....

Answer £ (3 marks)

A school wants to buy 470 sets of mathematical instruments.
They buy them in boxes of 40

- 7 (b) Work out the number of boxes the school should buy.

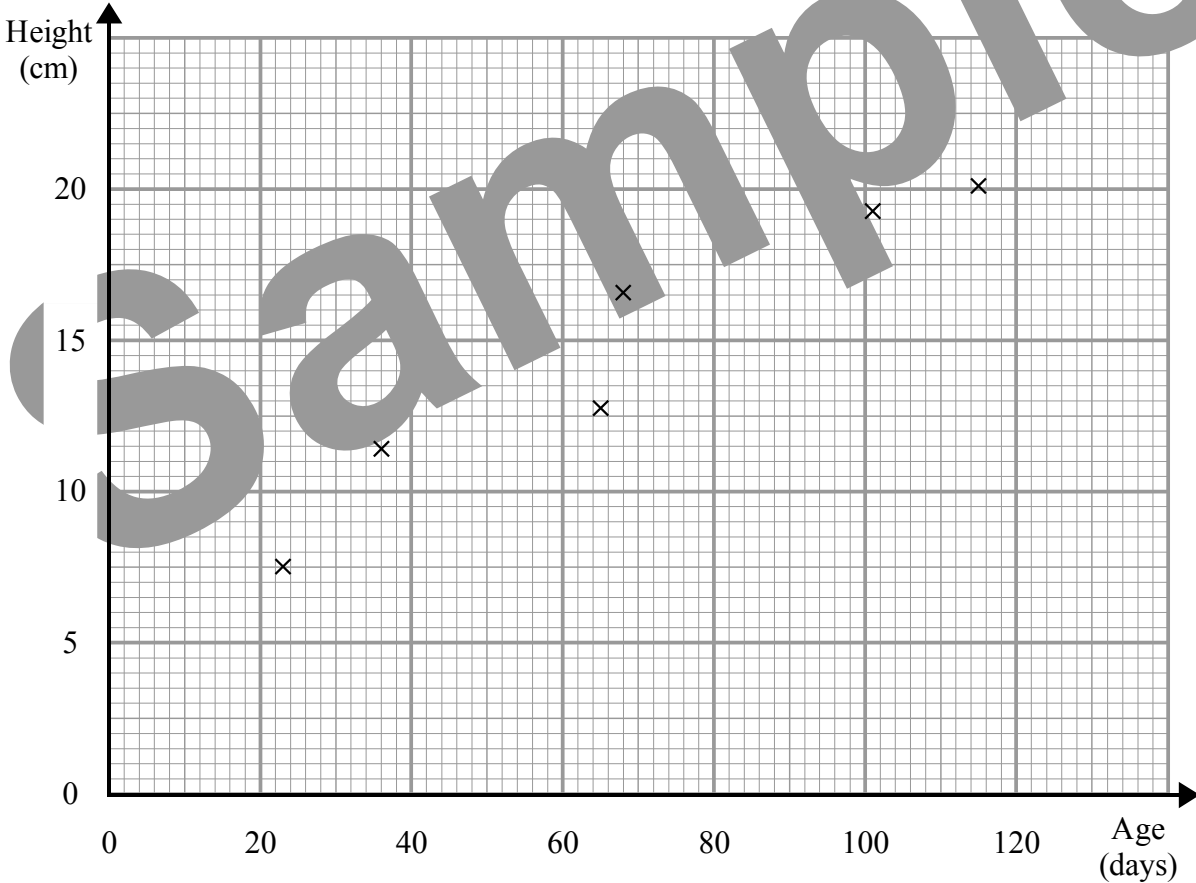
.....
.....
.....

Answer (2 marks)

8 The table shows the age in days and the heights in centimetres of eight plants.

Age (days)	36	115	68	23	101	65	38	91
Height (cm)	11.5	20.2	16.7	7.6	19.3	12.8	10.5	16.3

The first six pairs of values have been plotted on the scatter graph below.



8 (a) Plot the last two pairs of values on the scatter graph. (1 mark)

8 (b) Describe the **correlation** between the age and height of the plants.

Answer (1 mark)

8 (c) (i) Use your graph to estimate the age of another plant of the same type when it reached a height of 15 cm.

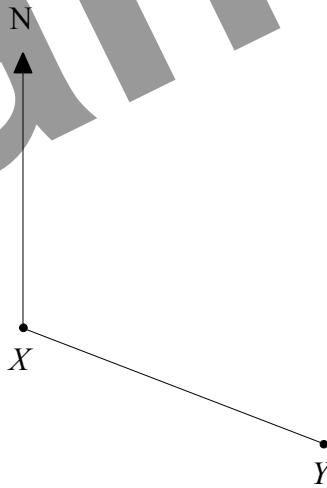
Answer days (2 marks)

8 (c) (ii) Explain why it might not be sensible to use your graph to estimate the age of a plant of the same type that is 24 cm tall.

.....
.....

(1 mark)

9



Not drawn accurately

The bearing of Y from X is 115° .

Work out the bearing of X from Y .

.....
.....
.....
.....

Answer degrees (2 marks)

10 Work out an estimate for the value of $\frac{916 \times 28.45}{(2.96)^2}$

.....


.....

.....

.....

Answer (3 marks)

11



ABC is a triangle.

Shade the region inside the triangle which is nearer to point A than point C and less than 5 cm from the point C .

(4 marks)

12 (a) Simplify $(2a)^2$

Answer (1 mark)

12 (b) Simplify $\frac{x^5 \times x^2}{x^3}$

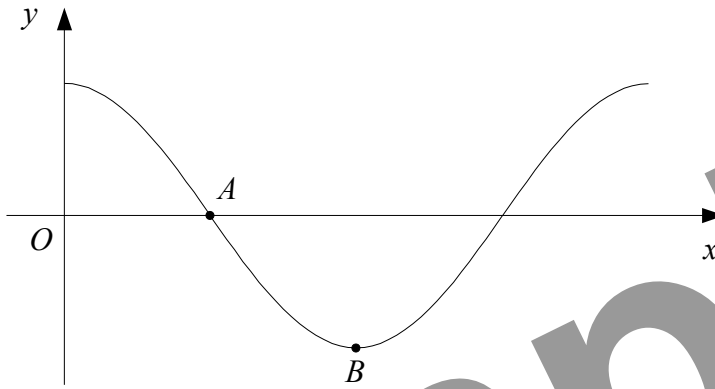
Answer (1 mark)

12 (c) Show that $x^2 - 8x + 19$ can be written in the form $(x + a)^2 + b$ for all values of x .
State the value of a and the value of b .

.....
.....
.....
.....
.....
.....
.....

Answer $a =$ $b =$ (3 marks)

13



The diagram shows a sketch of part of the graph of $y = \cos x^\circ$.

13 (a) Write down the coordinates of

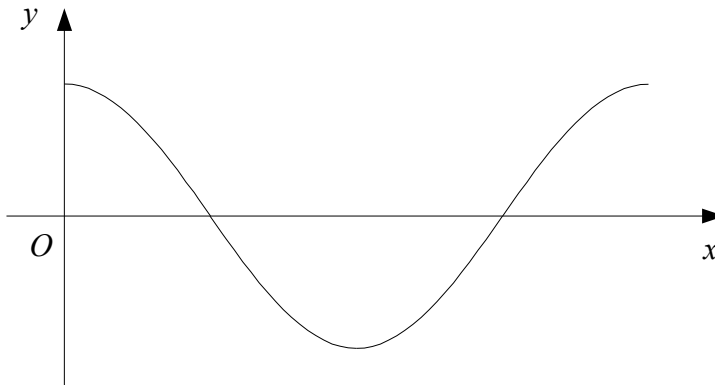
13 (a) (i) A ,

Answer (.....,) (1 mark)

13 (a) (ii) B .

Answer (.....,) (1 mark)

13 (b) On this copy of the diagram above, sketch the graph of $y = \cos 2x^\circ$.



(2 marks)

14 In this question, the letters a , b and c represent lengths.

State whether each expression could represent a length, an area or a volume.

14 (a) $ab + bc$

Answer (1 mark)

14 (b) πab^2

Answer (1 mark)

15

$$P = 2\pi r + 5r - l$$

Rearrange the formula to make r the subject.

.....
.....
.....
.....

Answer $r =$ (3 marks)

16 (a) Write down the value of $9^{-\frac{1}{2}}$

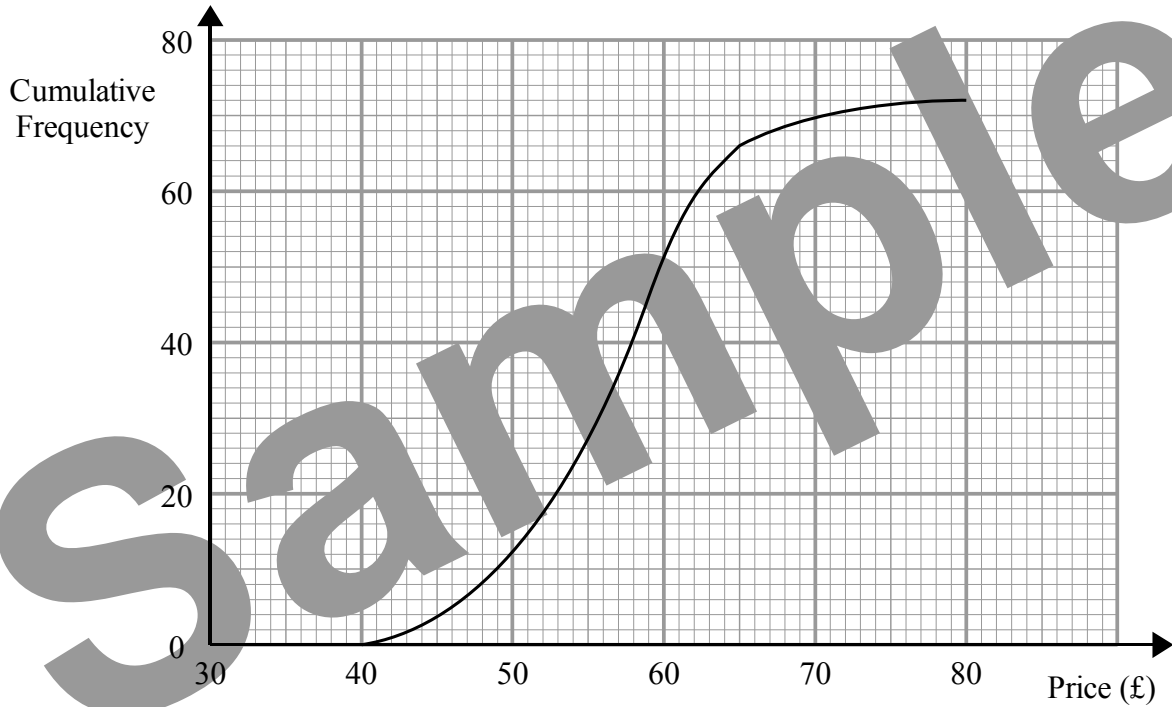
Answer (1 mark)

16 (b) Rationalise the denominator of $\frac{18}{\sqrt{3}}$ and simplify your answer.

.....
.....
.....
.....

Answer (2 marks)

17 This cumulative frequency diagram shows information about the price, in pounds, of 72 paintings on display at a gallery.

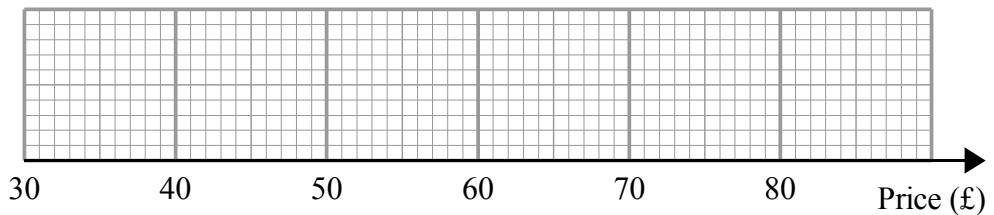


17 (a) Use the graph to estimate the median price of the paintings.

Answer £ (1 mark)

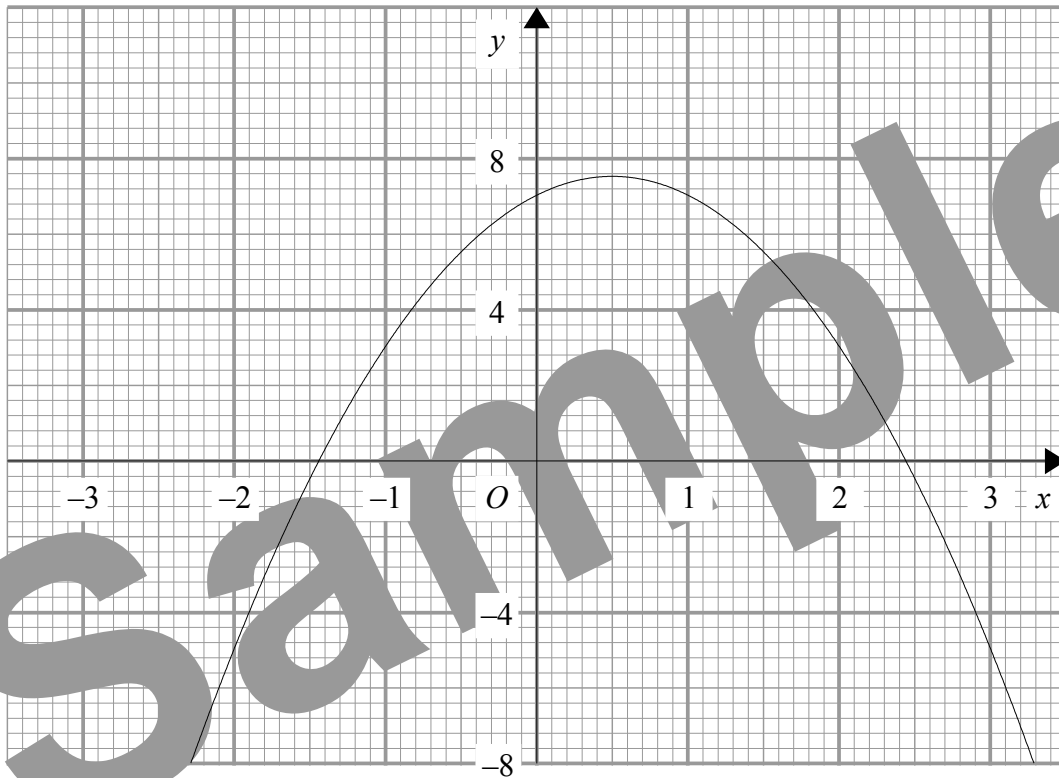
The lowest price was £41 and the highest price was £78

17 (b) Use this information and the graph to draw a box plot for the prices of the paintings.



(3 marks)

20



The diagram shows the graph of $y = 7 + 2x - 2x^2$

- 20 (a) Use the graph to estimate the solutions to the equation

$$7 + 2x - 2x^2 = 0$$

Answer (1 mark)

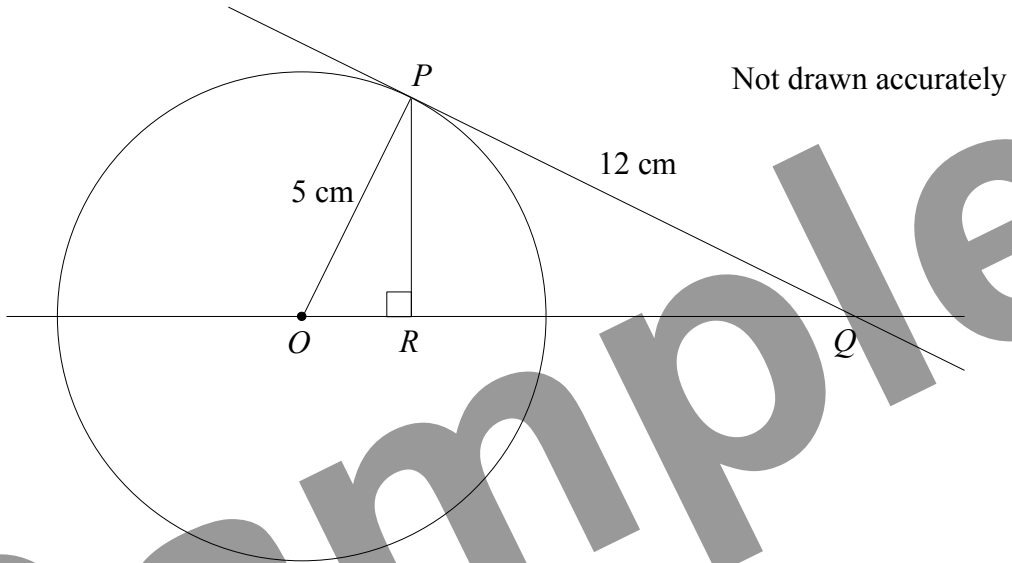
- 20 (b) Explain how, using the graph, you can tell that there are no solutions to the equation

$$2x - 2x^2 = 1$$

.....
.....
.....

(2 marks)

21



P is a point on a circle, centre O .
The line PQ is the tangent to the circle at P .
 R is the point on OQ such that angle $ORP = 90^\circ$.

21 (a) Prove that triangle OPR and triangle OPQ are similar.

.....
.....
.....
.....

(3 marks)

$OP = 5$ cm.
 $PQ = 12$ cm.

21 (b) Find the exact length of OR .

.....
.....
.....
.....

Answer cm (4 marks)

- 22 Jenny is marking Question 1 on a set of examination papers.
The question has two parts and for each part, an answer is either correct or incorrect.

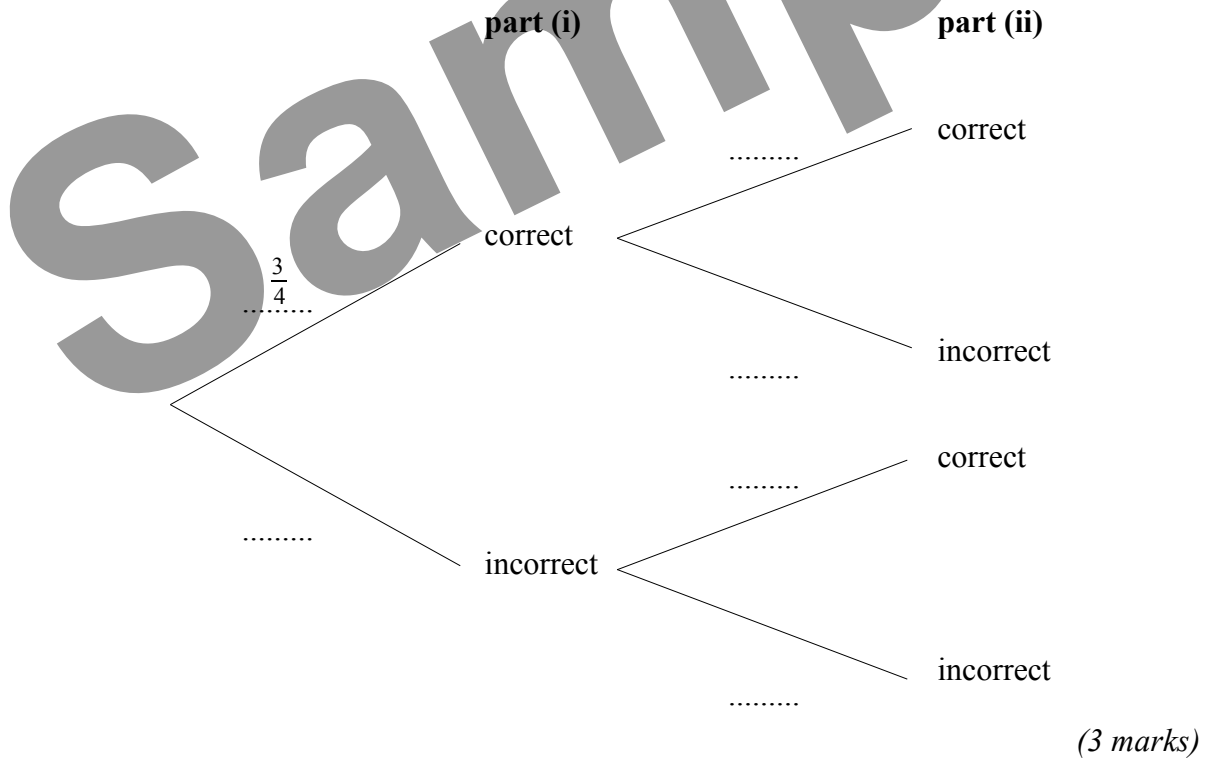
On a paper, the probability that she will mark part (i) correct is $\frac{3}{4}$

If she marks part (i) correct, the probability that she will mark part (ii) correct is $\frac{4}{5}$

If she marks part (i) incorrect, the probability that she will mark part (ii) correct is $\frac{1}{3}$

Jenny marks one paper.

- 22 (a) Complete the tree diagram.



- 22 (b) Work out the probability that she marks both parts correct.

.....

.....

.....

Answer *(2 marks)*

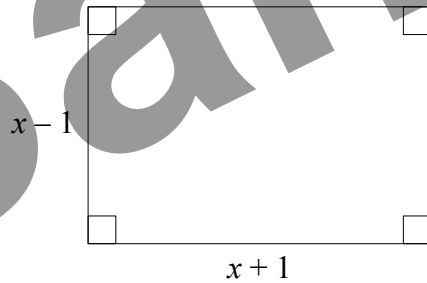
One evening, Jenny marks 180 papers.

- 22 (c) Work out an estimate for the number of papers on which she marks at least one part correct.

.....
.....
.....
.....

Answer (4 marks)

23



Not drawn accurately

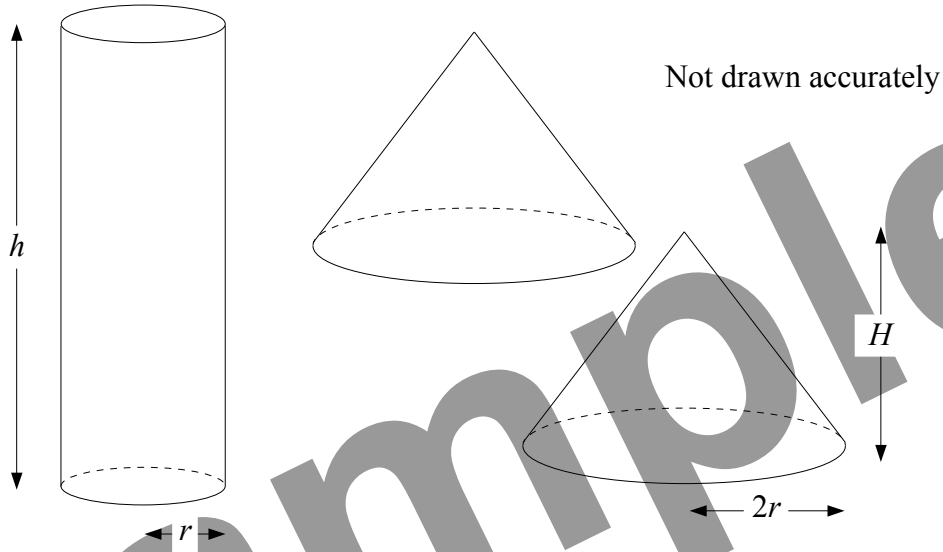
The diagram shows a rectangle measuring $(x - 1)$ cm by $(x + 1)$ cm.
The diagonals of the rectangle are each 10 cm long.

Find the area of the rectangle.

.....
.....
.....
.....
.....
.....
.....
.....
.....
.....

Answer cm^2 (5 marks)

24



Some plasticine is used to make a solid cylinder of base radius r cm and height h cm.

The plasticine is then split in half and used to make two identical cones.
Each cone has base radius $2r$ cm and height H cm.

Express H in terms of h .
Give your answer in its simplest form.

.....

.....

.....

.....

.....

.....

.....

.....

Answer $H = \dots\dots\dots$ (4 marks)

END OF QUESTIONS